



88126502

**PHYSICS  
HIGHER LEVEL  
PAPER 2**

Tuesday 13 November 2012 (afternoon)

2 hours 15 minutes

Candidate session number

|   |   |  |  |  |  |  |  |  |  |
|---|---|--|--|--|--|--|--|--|--|
| 0 | 0 |  |  |  |  |  |  |  |  |
|---|---|--|--|--|--|--|--|--|--|

Examination code

|   |   |   |   |   |   |   |   |   |
|---|---|---|---|---|---|---|---|---|
| 8 | 8 | 1 | 2 | - | 6 | 5 | 0 | 2 |
|---|---|---|---|---|---|---|---|---|

**INSTRUCTIONS TO CANDIDATES**

- Write your session number in the boxes above.
- Do not open this examination paper until instructed to do so.
- Section A: answer all questions.
- Section B: answer two questions.
- Write your answers in the boxes provided.
- A calculator is required for this paper.
- A clean copy of the **Physics Data Booklet** is required for this paper.
- The maximum mark for this examination paper is [95 marks].



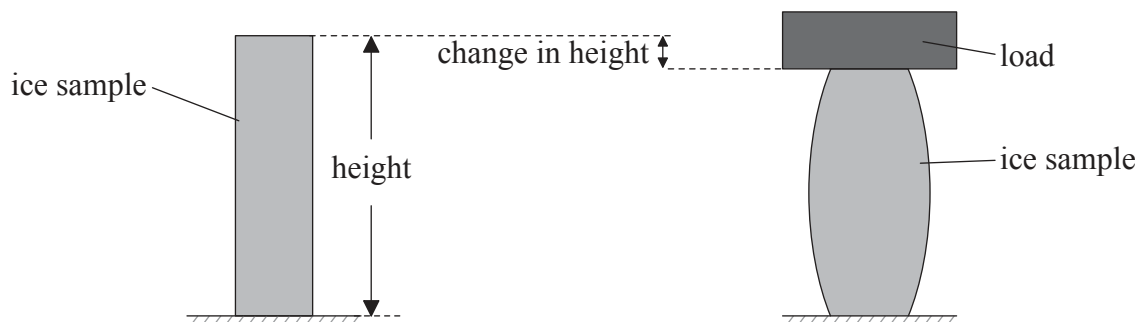
0136

**SECTION A**

Answer **all** questions. Write your answers in the boxes provided.

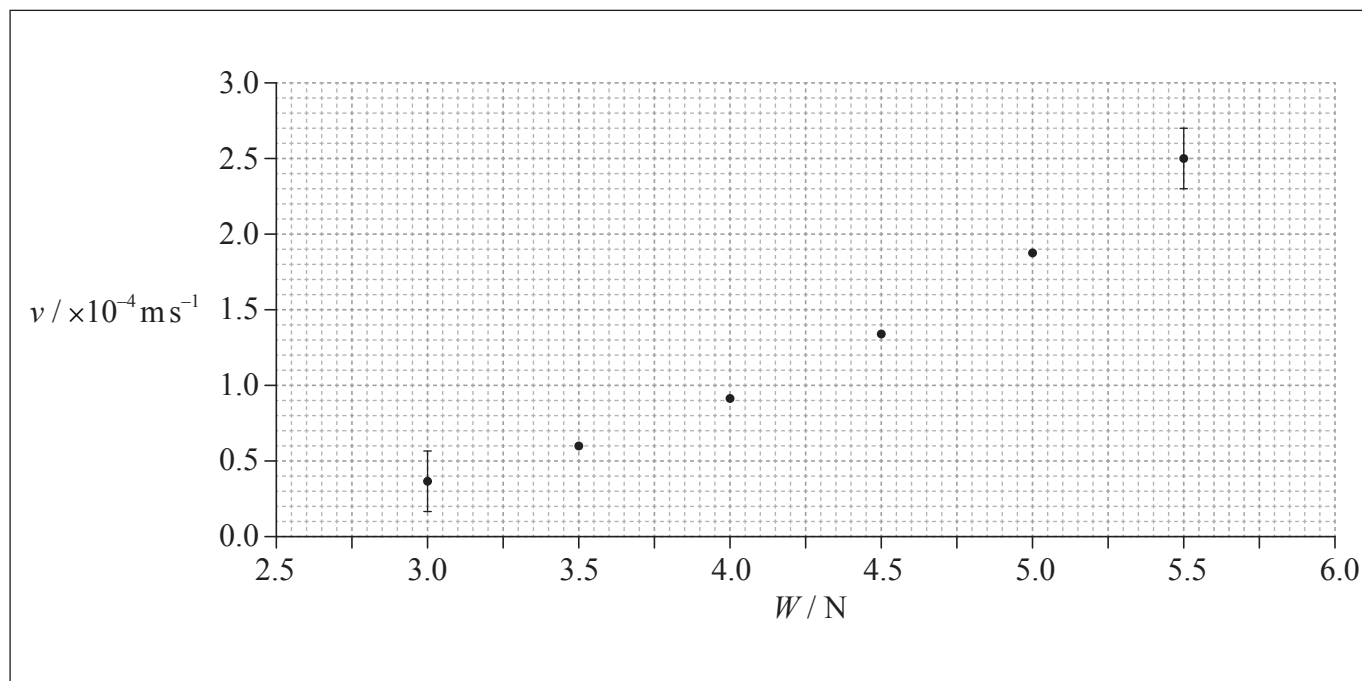
**A1.** Data analysis question.

The movement of glaciers can be modelled by applying a load to a sample of ice.



After the load has been applied, it is observed to move downwards at a constant speed  $v$  as the ice deforms. The constant speed  $v$  is measured for different loads. The graph shows the variation of  $v$  with load  $W$  for a number of identical samples of ice.

The data points are plotted below.



(This question continues on the following page)



*(Question A1 continued)*

Error bars for  $v$  are shown for two data points. The uncertainty in  $W$  is negligible.

- (a) On the graph opposite, draw the line of best-fit for the data points. [1]
- (b) Explain whether the data support the hypothesis that  $v$  is directly proportional to  $W$ . [1]

.....

.....

.....

.....

*(This question continues on the following page)*



0336

**Turn over**

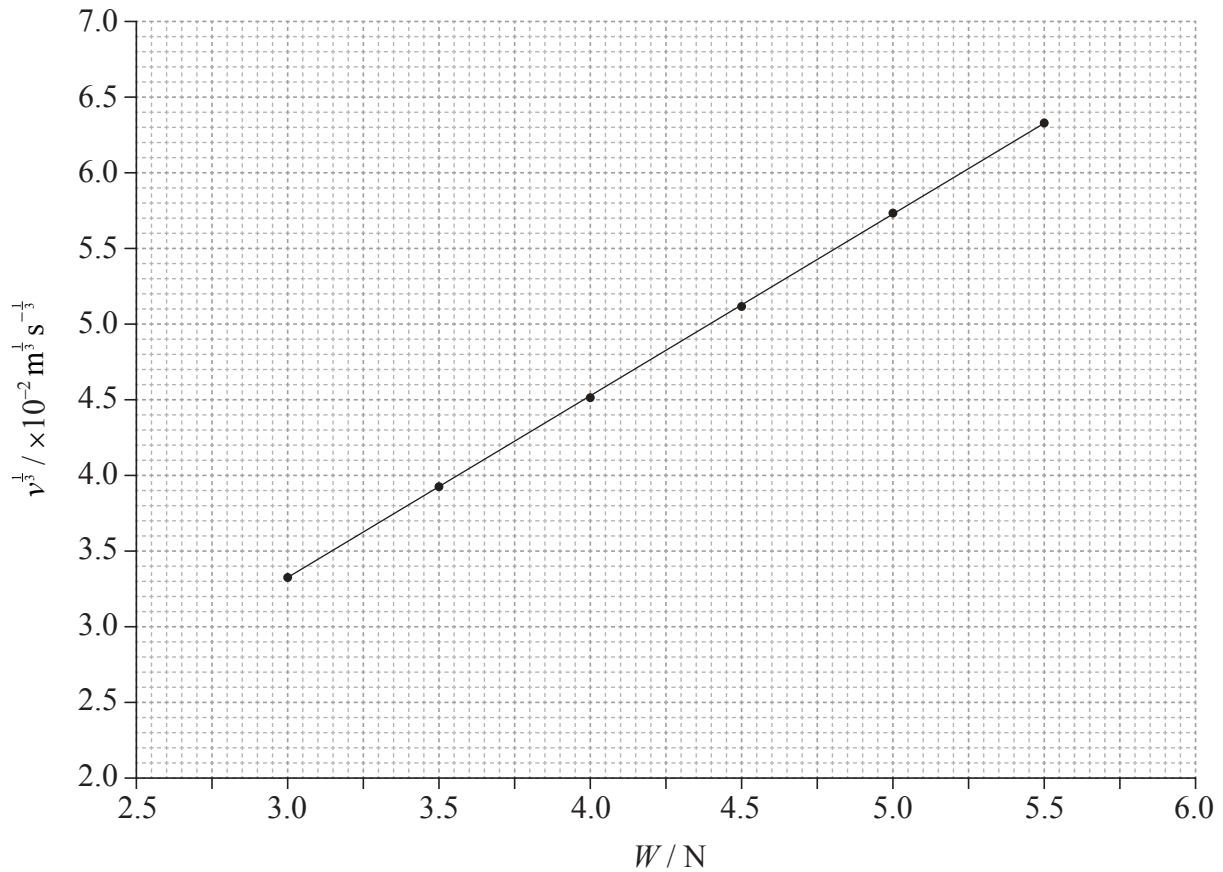
(Question A1 continued)

(c) Theory suggests that the relation between  $v$  and  $W$  is

$$v = kW^3$$

where  $k$  is a constant.

To test this hypothesis a graph of  $v^{\frac{1}{3}}$  against  $W$  is plotted.



At  $W=5.5 \text{ N}$  the speed is  $250 \pm 20 \mu\text{m s}^{-1}$ .

Calculate the uncertainty in  $v^{\frac{1}{3}}$  for a load of 5.5 N.

[3]

.....

.....

.....

.....

.....

.....

(This question continues on the following page)



0436

*(Question A1 continued)*

- (d) (i) Using the graph in (c), determine  $k$  without its uncertainty. [4]

.....

.....

.....

.....

.....

.....

.....

.....

.....

- (ii) State an appropriate unit for your answer to (d)(i). [1]

.....



A2. This question is about momentum change.

(a) State the law of conservation of linear momentum.

[2]


.....

.....

.....

.....

(b) Gravel falls vertically onto a moving horizontal conveyor belt.



(i) The gravel falls at a constant rate of  $13 \text{ kg s}^{-1}$  through a height of 1.9 m. Show that the vertical speed of the gravel as it lands on the conveyor belt is about  $6 \text{ m s}^{-1}$ .

[2]

.....

.....

.....

.....

(ii) The gravel lands on the conveyor belt without rebounding. Calculate the rate of change of the vertical momentum of the gravel.

[2]

.....

.....

.....

.....

(This question continues on the following page)



(Question A2 continued)

- (iii) Gravel first reaches the belt at  $t=0.0\text{s}$  and continues to fall. Determine the total vertical force that the gravel exerts on the conveyor belt at  $t=5.0\text{s}$ . [3]

.....

.....

.....

.....

.....

.....

- (c) The conveyor belt moves with a constant horizontal speed of  $1.5\text{ms}^{-1}$ . As the gravel lands on the belt, it has no horizontal speed.

- (i) Calculate the rate of change of the kinetic energy of the gravel due to its change in horizontal speed. [1]

.....

.....

- (ii) Determine the power required to move the conveyor belt at constant speed. [2]

.....

.....

.....

.....

- (iii) Outline why the answers to (c)(i) and (ii) are different. [1]

.....

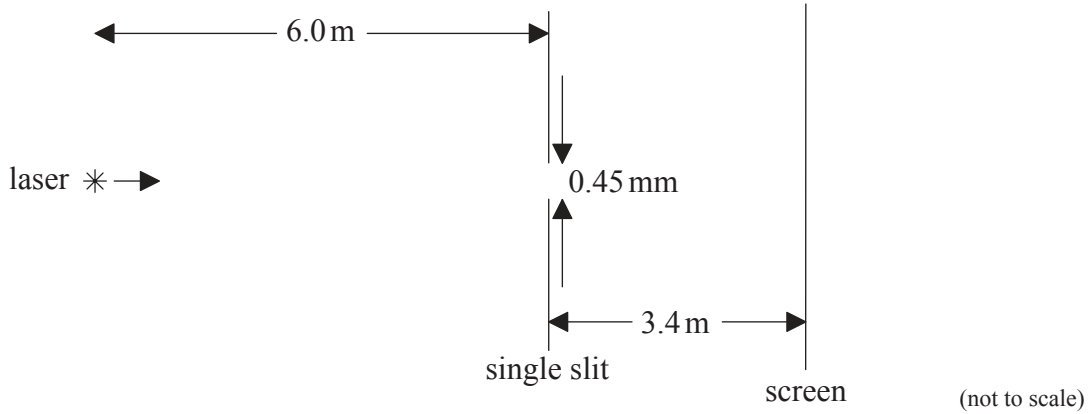
.....

.....



A3. This question is about diffraction and interference.

- (a) Light of wavelength 620 nm from a laser is incident on a single rectangular slit of width 0.45 mm.



After passing through the slit, the light is incident on a screen that is a distance of 3.4 m from the slit. Calculate the distance between the centre and the first minimum of the diffraction pattern.

[2]

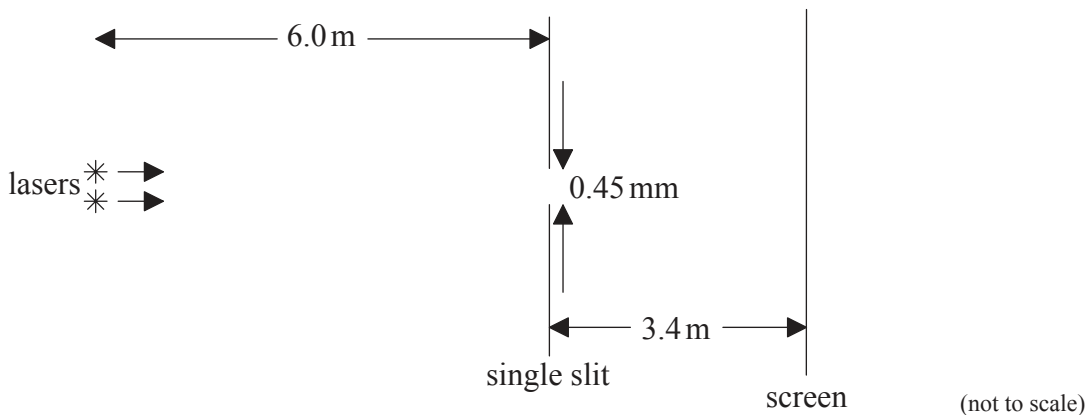
.....

.....

.....

.....

- (b) The laser in (a) is replaced by two identical lasers so that the light from both lasers illuminates the slit. The lasers are both 6.0 m from the slit. The two diffraction patterns on the screen are resolved according to the Rayleigh criterion.



(This question continues on the following page)





(Question A3 continued)

- (i) State what is meant by the Rayleigh criterion. [1]

.....  
.....  
.....

- (ii) The minimum separation of the two laser beams is  $x$ . Determine  $x$ . [2]

.....  
.....  
.....  
.....

- (c) Compare the appearance of a single-slit diffraction pattern formed by laser light to that formed by a source of white light. [2]

.....  
.....  
.....  
.....  
.....



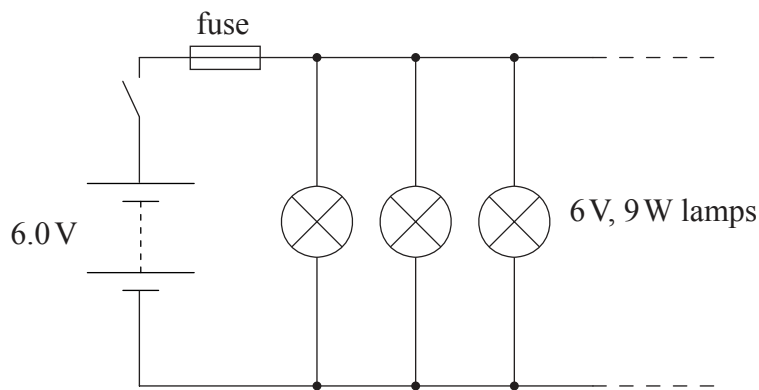
A4. This question is about a lighting system.

(a) State Ohm's law.

[1]

.....  
.....

(b) A lighting system is designed so that additional lamps can be added in parallel.



The diagram shows three 6 V, 9 W lamps connected in parallel to a supply of emf 6.0 V and negligible internal resistance. A fuse in the circuit melts if the current in the circuit exceeds 13 A.

(i) Determine the maximum number of lamps that can be connected in parallel in the circuit without melting the fuse.

[3]

.....  
.....  
.....  
.....  
.....  
.....  
.....

(This question continues on the following page)



*(Question A4 continued)*

- (ii) Calculate the resistance of a lamp when operating at its normal brightness. [1]

.....

.....

- (iii) By mistake, a lamp rated at 12 V, 9 W is connected in parallel with three lamps rated at 6 V, 9 W. Estimate the resistance of the circuit. [3]

.....

.....

.....

.....

.....

.....

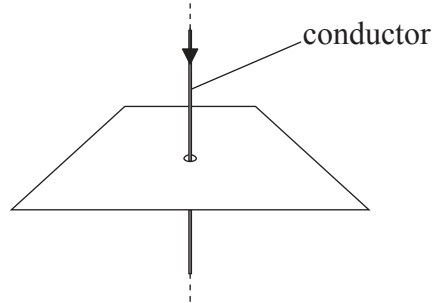
.....

.....

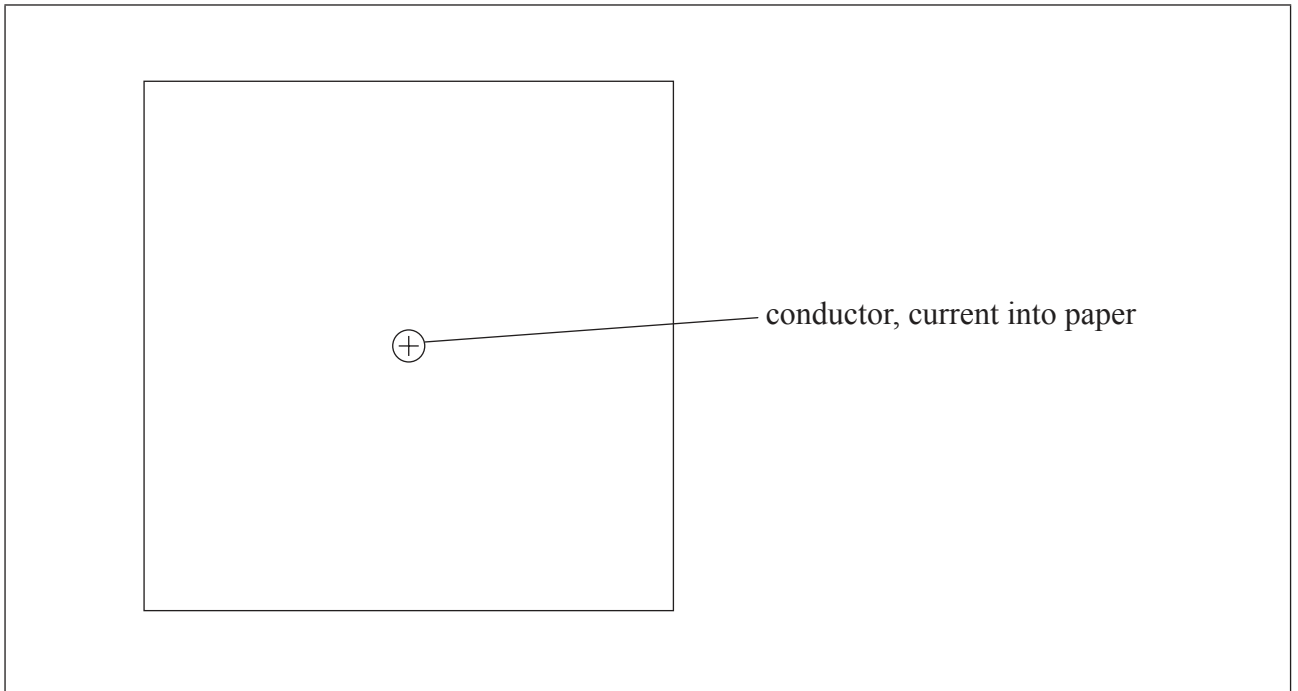


A5. This question is about magnetic fields.

A long straight vertical conductor carries an electric current. The conductor passes through a hole in a horizontal piece of paper.



(a) On the diagram below, sketch the magnetic field pattern around the long straight current-carrying conductor. The direction of the current is into the plane of the paper. [2]

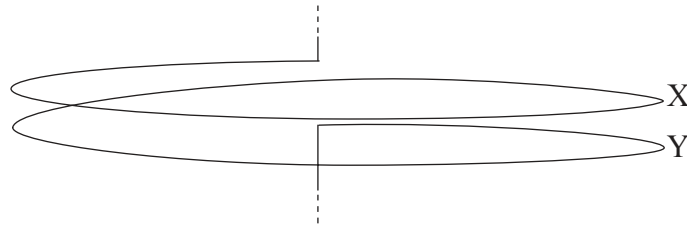


*(This question continues on the following page)*



(Question A5 continued)

- (b) The long straight conductor is formed into a coil consisting of two separate turns, X and Y. The coil hangs with its axis vertical.



Assume that the turns of the coil each behave as a long straight conductor.

- (i) Explain why, when there is a current in the coil, the separation of X and Y decreases. [2]

.....

.....

.....

.....

.....

- (ii) The current in the coil is 15A and the circumference of one turn is 0.48m. In order to restore X and Y to their original separation, a mass of  $2.8 \times 10^{-4}$  kg is suspended from turn Y. Estimate the magnetic field strength at X due to Y. [3]

.....

.....

.....

.....

.....

.....



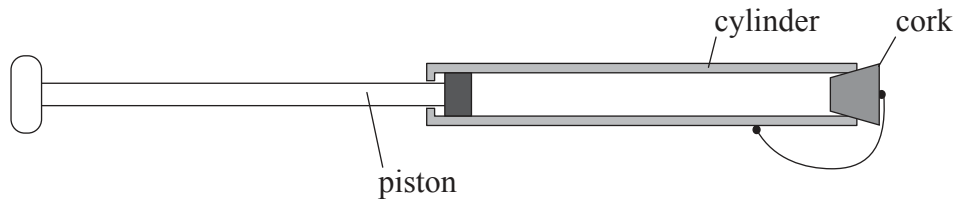
**SECTION B**

*This section consists of four questions: B1, B2, B3 and B4. Answer **two** questions. Write your answers in the boxes provided.*

**B1.** This question is in **two** parts. **Part 1** is about processes in a gas. **Part 2** is about rocket motion.

**Part 1** Processes in a gas

In a toy, the air in a cylinder is compressed quickly by a piston. The diagram shows the toy before the air is compressed.



The air in the cylinder can be regarded as an ideal gas. Before compression, the air in the cylinder is at a pressure of  $1.1 \times 10^5 \text{ Pa}$  and a temperature of  $290 \text{ K}$ . The volume of the air in the cylinder is  $6.0 \times 10^{-4} \text{ m}^3$ .

(a) Calculate the number of moles of air in the cylinder.

[2]

.....

.....

.....

.....

*(This question continues on the following page)*



*(Question B1, part 1 continued)*

(b) The cork leaves the toy after the air is compressed to a pressure of  $1.9 \times 10^5 \text{ Pa}$  and a volume of  $4.0 \times 10^{-4} \text{ m}^3$ .

(i) Deduce that the compression of the gas is not isothermal. [2]

.....

.....

.....

.....

.....

(ii) Outline why the compression might be adiabatic. [2]

.....

.....

.....

.....

(iii) The work needed to compress the air in (a) is 15J. Determine, with reference to the first law of thermodynamics, the change in the internal energy of the air in the cylinder. [3]

.....

.....

.....

.....

.....

.....

*(This question continues on the following page)*



*(Question B1, part 1 continued)*

- (iv) Calculate the change in average kinetic energy of an air molecule as a result of the compression. [2]

.....  
.....  
.....  
.....  
.....

- (c) The piston is now pushed in slowly so that the compression is isothermal. Discuss the entropy changes that take place in the air of the toy and in its cylinder as the air is compressed. [4]

.....  
.....  
.....  
.....  
.....  
.....  
.....  
.....

*(This question continues on page 18)*





Please **do not** write on this page.

Answers written on this page  
will not be marked.



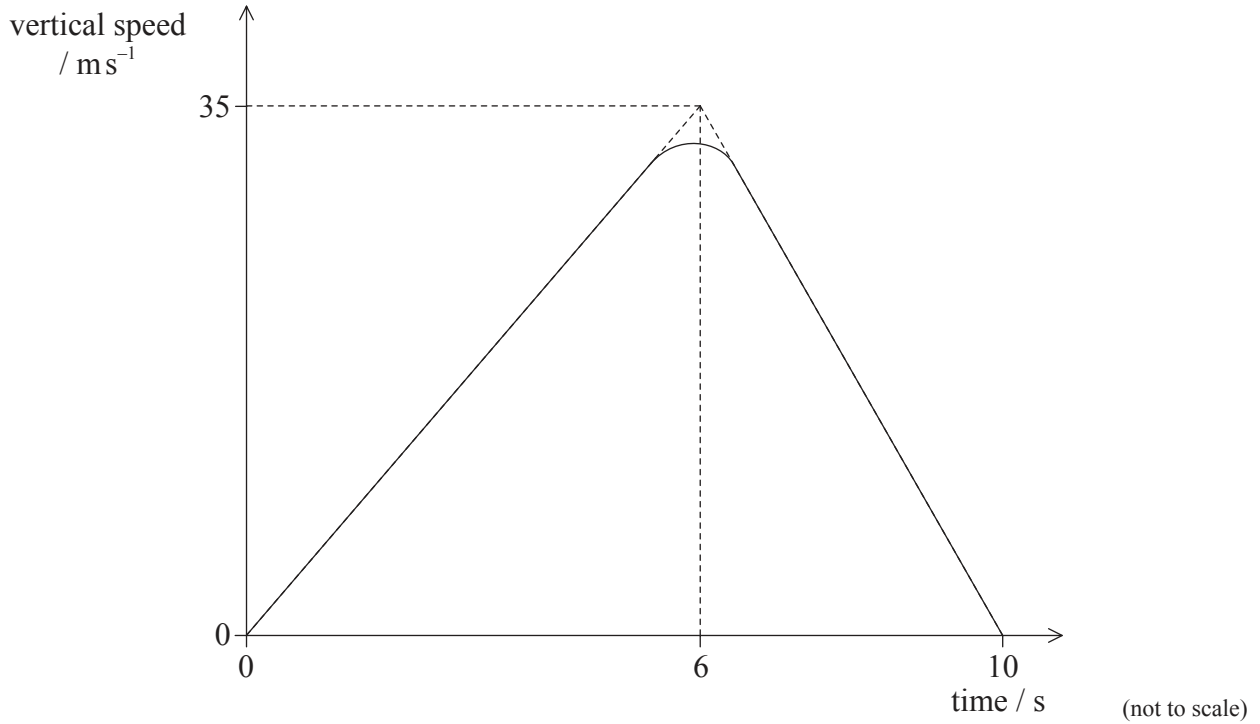
1736

Turn over

(Question B1, continued from page 16)

**Part 2** Rocket motion

A test model of a two-stage rocket is fired vertically upwards from the surface of Earth. The sketch graph shows how the vertical speed of the rocket varies with time from take-off until the first stage of the rocket reaches its maximum height.



- (a) (i) Show that the maximum height reached by the first stage of the rocket is about 170 m. [3]

.....

.....

.....

.....

.....

.....

(This question continues on the following page)



(Question B1, part 2 continued)

- (ii) On reaching its maximum height, the first stage of the rocket falls away and the second stage fires so that the rocket acquires a constant horizontal velocity of  $56\text{ms}^{-1}$ . Calculate the velocity at the instant when the second stage of the rocket returns to the surface of the Earth. Ignore air resistance. [4]

.....

.....

.....

.....

.....

.....

.....

.....

- (b) A full-scale version of the rocket reaches a height of 260km when the first stage falls away. Using the data below, calculate the speed at which the second stage of the rocket will orbit the Earth at a height of 260km. [3]

Mass of Earth =  $6.0 \times 10^{24}$  kg  
Radius of Earth =  $6.4 \times 10^6$  m

.....

.....

.....

.....

.....

.....

.....

.....



**B2.** This question is about electrical generation using nuclear power.

Exposure to radiation is a safety risk both to miners of uranium ore and to workers in nuclear power plants.

(a) State **two** other safety problems associated with nuclear power. [2]

|    |  |
|----|--|
| 1. |  |
|    |  |
| 2. |  |
|    |  |

(b) Outline why uranium ore needs to be enriched before it can be used successfully in a nuclear reactor. [3]

|  |
|--|
|  |
|  |
|  |
|  |
|  |
|  |

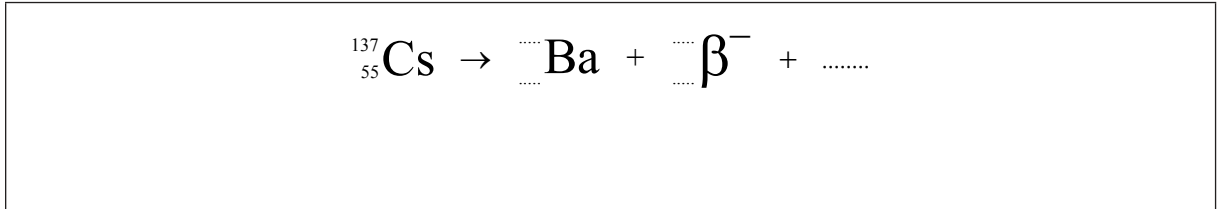
*(This question continues on the following page)*



(Question B2 continued)

- (c) (i) One possible waste product of a nuclear reactor is the nuclide caesium-137 ( $^{137}_{55}\text{Cs}$ ) which decays by the emission of a beta-minus ( $\beta^-$ ) particle to form a nuclide of barium (Ba).

State the nuclear reaction for this decay. [3]



- (ii) The half-life of caesium-137 is 30 years. Determine the fraction of caesium-137 remaining in the waste after 100 years. [3]

.....

.....

.....

.....

.....

.....

- (d) Some waste products in nuclear reactors are good absorbers of neutrons. Suggest why the formation of such waste products requires the removal of the uranium fuel rods well before the uranium is completely used up. [2]

.....

.....

.....

.....

.....

(This question continues on the following page)



Turn over

*(Question B2 continued)*

(e) The alternating current produced by the generator in a nuclear power plant is supplied to the primary coil of a transformer.

(i) Explain, with reference to Faraday’s law of electromagnetic induction, how a current arises in the secondary coil of the transformer. [4]

.....

.....

.....

.....

.....

.....

.....

.....

.....

.....

(ii) The rms output voltage of the generator is 23 kV. A transformer is to produce an rms output of 33 kV when the primary is connected to the generator. Calculate the ratio of primary turns to secondary turns required, assuming that the transformer is ideal. [2]

.....

.....

.....

.....

*(This question continues on the following page)*



*(Question B2 continued)*

(iii) Outline why electrical energy is transmitted at high voltages. [3]

.....

.....

.....

.....

.....

.....

(iv) The output rms voltage of a transformer is 33 kV and the output rms current is 16A. The transformer is connected to cables of total resistance  $290\Omega$ . Determine the fraction of the power lost in the cables. [3]

.....

.....

.....

.....

.....

.....



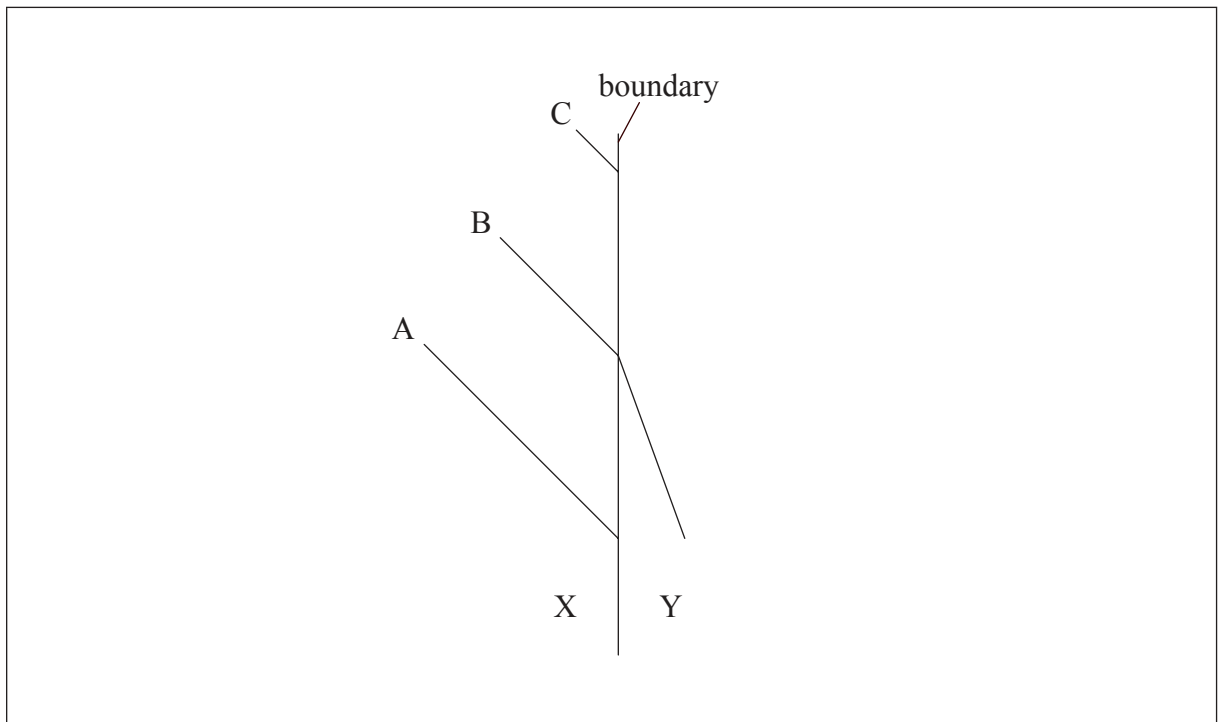
**B3.** This question is in **two** parts. **Part 1** is about wave motion. **Part 2** is about electrons.

**Part 1** Wave motion

- (a) State what is meant by the terms ray and wavefront and state the relationship between them. [3]

.....  
.....  
.....  
.....  
.....  
.....

- (b) The diagram shows three wavefronts, A, B and C, of a wave at a particular instant in time incident on a boundary between media X and Y. Wavefront B is also shown in medium Y.



- (i) Draw a line to show wavefront C in medium Y. [1]

*(This question continues on the following page)*





(Question B3, part 1 continued)

- (ii) The refractive index of X is  $n_x$  and the refractive index of Y is  $n_y$ . By making appropriate measurements, calculate  $\frac{n_x}{n_y}$ . [3]

.....

.....

.....

.....

.....

.....

- (c) The wave in (b) is transverse. Describe the difference between transverse waves and longitudinal waves. [2]

.....

.....

.....

.....

.....

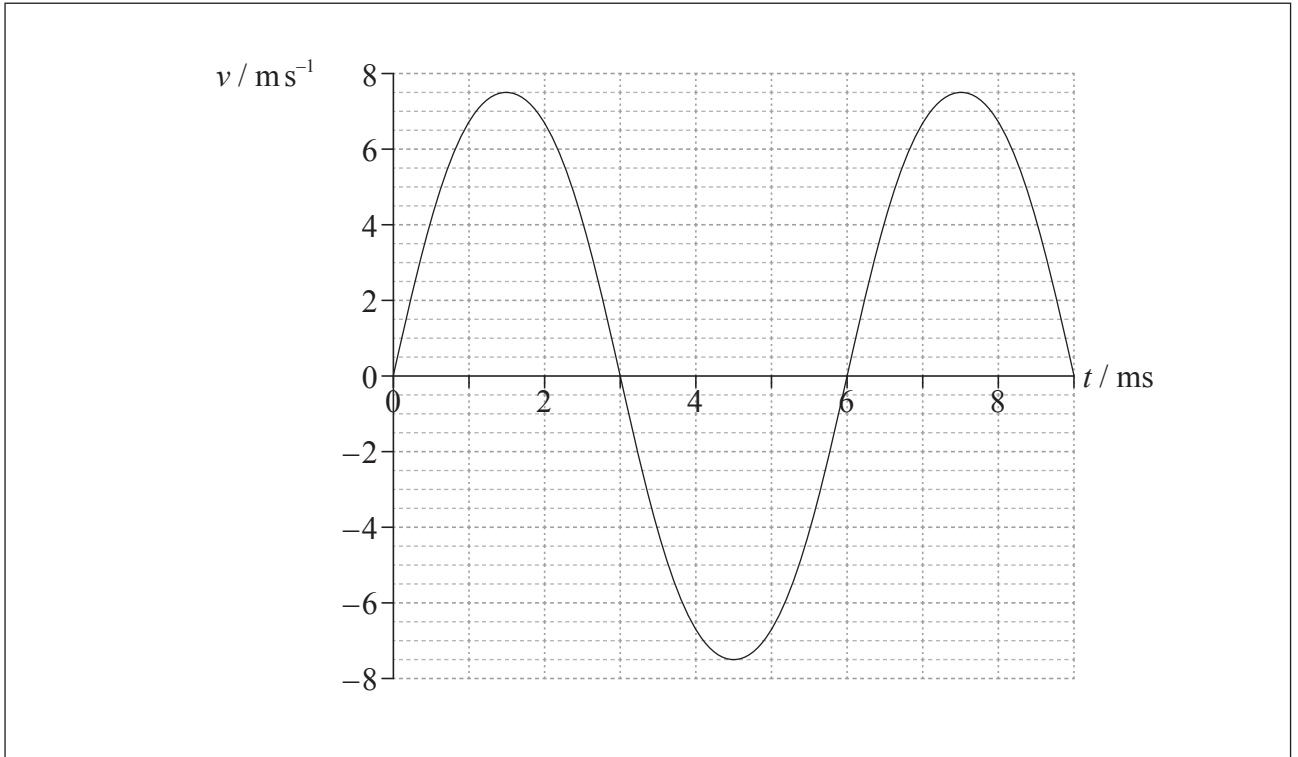
.....

(This question continues on the following page)



(Question B3, part 1 continued)

- (d) The graph below shows the variation of the velocity  $v$  with time  $t$  for one oscillating particle of medium Y.



- (i) Calculate the frequency of oscillation of the particle. [2]

.....  
.....  
.....  
.....

- (ii) Identify on the graph, with the letter M, a time at which the displacement of the particle is a maximum. [1]

(This question continues on the following page)



*(Question B3, part 1 continued)*

- (iii) Using the graph, determine the approximate amplitude of the oscillation of the particle. [3]

.....

.....

.....

.....

.....

.....

.....

*(This question continues on the following page)*



*(Question B3 continued)*

**Part 2**    Electrons

- (a) Monochromatic light is incident on a metal surface and electrons are emitted instantaneously from the surface.

Explain why

- (i) the emission of the electrons is instantaneous. [3]

.....

.....

.....

.....

.....

.....

- (ii) the energy of the emitted electrons does not depend on the intensity of the incident light. [1]

.....

.....

.....

*(This question continues on the following page)*



(Question B3, part 2 continued)

(b) The wavelength of the incident light in (a) is 420 nm and the work function of the metal is  $3.4 \times 10^{-19}$  J.

(i) Determine, in joules, the maximum kinetic energy of an emitted electron. [3]

.....  
.....  
.....  
.....  
.....

(ii) The metal surface has dimensions of 1.5 mm × 2.0 mm. The intensity of the light incident on the surface is  $4.5 \times 10^{-6}$  W m<sup>-2</sup>. On average, one electron is emitted for every 300 photons that are incident on the surface. Determine the initial electric current leaving the metal surface. [3]

.....  
.....  
.....  
.....  
.....  
.....  
.....  
.....



Turn over

**B4.** This question is in **two** parts. **Part 1** is about an oscillating water column (OWC) energy converter. **Part 2** is about the melting of the Pobeda ice island.

**Part 1** Oscillating water column (OWC) energy converter

(a) OWCs are suggested as alternative sources of energy.

(i) Describe the main features of an OWC. [3]

.....

.....

.....

.....

.....

.....

(ii) Outline the energy transformations that take place in an OWC. [2]

.....

.....

.....

.....

.....

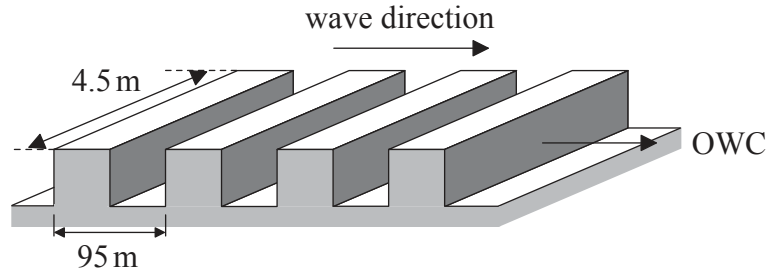
.....

*(This question continues on the following page)*



(Question B4, part 1 continued)

- (b) (i) An OWC design has an aperture that accepts a wave width of 4.5 m. The waves at the proposed site have an average wavelength of 95 m and wave period of 8.0 s. The overall efficiency of the energy conversion of the OWC is 24%.



(not to scale)

Assuming that the waves have a rectangular cross-section, determine the minimum wave amplitude that will be required in order for the OWC to produce a power output of 0.10 MW. [3]

Density of water =  $1000 \text{ kg m}^{-3}$

.....

.....

.....

.....

.....

.....

.....

.....

- (ii) State **one** disadvantage of moving the OWC to another site where the average amplitude of the waves is double your answer to (b)(i). [1]

.....

.....

(This question continues on the following page)



(Question B4 continued)

**Part 2** Melting of the Pobeda ice island

- (a) The Pobeda ice island forms regularly when icebergs run aground near the Antarctic ice shelf. The “island”, which consists of a slab of pure ice, breaks apart and melts over a period of decades. The following data are available.

|   |  |
|---|--|
| Typical dimensions of surface of island | = 70 km × 35 km  |
| Typical height of island                | = 240 m  |
| Average temperature of the island       | = -35 °C   |
| Density of sea ice                      | = 920 kg m <sup>-3</sup>                                   |
| Specific latent heat of fusion of ice   | = 3.3 × 10 <sup>5</sup> J kg <sup>-1</sup>                 |
| Specific heat capacity of ice           | = 2.1 × 10 <sup>3</sup> J kg <sup>-1</sup> K <sup>-1</sup> |

- (i) Show that the energy required to melt the island to form water at 0 °C is about 2 × 10<sup>20</sup> J. Assume that the top and bottom surfaces of the island are flat and that it has vertical sides. [3]

.....

.....

.....

.....

.....

.....

.....

(This question continues on the following page)





*(Question B4, part 2 continued)*

- (ii) The Sun supplies thermal energy at an average rate of  $450 \text{ W m}^{-2}$  to the surface of the island. The albedo of melting ice is 0.80. Determine an estimate of the time taken to melt the island assuming that the melted water is removed immediately and that no heat is lost to the surroundings. [3]

.....

.....

.....

.....

.....

.....

.....

*(This question continues on the following page)*



(Question B4, part 2 continued)

- (b) A charge-coupled device (CCD) is attached to a telescope which monitors the state of the island. The following data are available.

|   |                          |
|---|--------------------------|
| Quantum efficiency of a pixel                     | =75%                     |
| Number of photons arriving at a pixel each second | = $5.2 \times 10^9$      |
| Exposure time                                     | =0.033 s                 |
| Effective capacitance of one pixel                | = $2.7 \times 10^{-9}$ F |
| Number of pixels per unit length of CCD           | = $240 \text{ mm}^{-1}$  |

- (i) Outline how a potential difference (pd) develops across the pixel when light is incident on it. [3]

.....

.....

.....

.....

.....

.....

.....

.....

- (ii) Calculate the change in pd across the pixel during the exposure. [4]

.....

.....

.....

.....

.....

.....

.....

.....

(This question continues on the following page)



*(Question B4, part 2 continued)*

- (iii) The magnification of the CCD is  $1.7 \times 10^{-5}$ . Determine the length of the smallest feature on the island whose image can be resolved by the CCD. [3]

.....

.....

.....

.....

.....

.....



Please **do not** write on this page.

Answers written on this page  
will not be marked.



3636